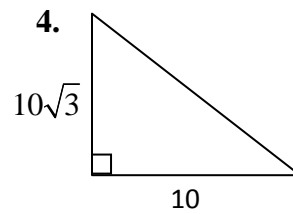
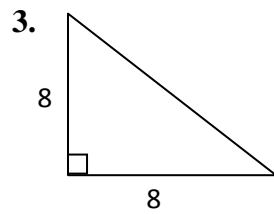
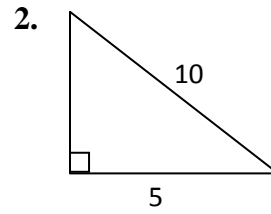
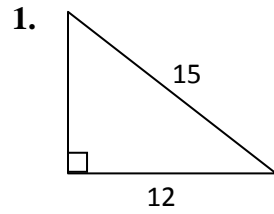


Lesson 2: The Pythagorean Theorem—Worksheet

Questions 1—4: Find the missing sides. Use Pythagorean triples if possible.



5. The legs of a right triangle are equal (such a triangle is called an isosceles right triangle). If the hypotenuse is 10, what is each leg?